



# Cambridge IGCSE™

CANDIDATE  
NAME

CENTRE  
NUMBER

--	--	--	--	--

CANDIDATE  
NUMBER

--	--	--	--



**MATHEMATICS**

**0580/22**

Paper 2 (Extended)

**October/November 2020**

**1 hour 30 minutes**

You must answer on the question paper.

You will need: Geometrical instruments

## INSTRUCTIONS

- Answer **all** questions.
- Use a black or dark blue pen. You may use an HB pencil for any diagrams or graphs.
- Write your name, centre number and candidate number in the boxes at the top of the page.
- Write your answer to each question in the space provided.
- Do **not** use an erasable pen or correction fluid.
- Do **not** write on any bar codes.
- You should use a calculator where appropriate.
- You may use tracing paper.
- You must show all necessary working clearly.
- Give non-exact numerical answers correct to 3 significant figures, or 1 decimal place for angles in degrees, unless a different level of accuracy is specified in the question.
- For  $\pi$ , use either your calculator value or 3.142.

## INFORMATION

- The total mark for this paper is 70.
- The number of marks for each question or part question is shown in brackets [ ].

This document has **12** pages. Blank pages are indicated.

2

- 1 Write two hundred thousand and seventeen in figures.

..... [1]

- 2 Insert one pair of brackets to make this calculation correct.

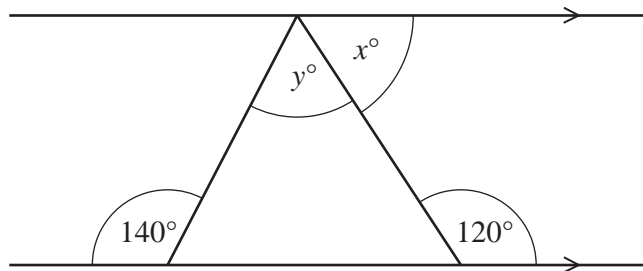
$$7 - 5 - 3 + 4 = 9 \quad [1]$$

- 3 Solve the equation.

$$6 - 2x = 3x$$

$x =$  ..... [2]

4



NOT TO  
SCALE

The diagram shows a triangle drawn between a pair of parallel lines.

Find the value of  $x$  and the value of  $y$ .

$x =$  .....

$y =$  ..... [3]

- 5 Increase 42 by 16%.

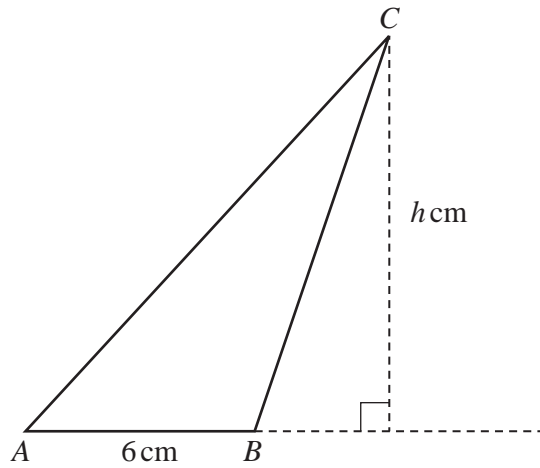
..... [2]

6 Factorise completely.

$$4 - 8x$$

..... [1]

7



NOT TO SCALE

The area of triangle  $ABC$  is  $27 \text{ cm}^2$  and  $AB = 6 \text{ cm}$ .

Calculate the value of  $h$ .

$h =$  ..... [2]

8 Calculate the size of one interior angle of a regular polygon with 40 sides.

..... [2]

9 Solve the simultaneous equations.

$$2x + y = 7$$

$$3x - y = 8$$

$$x = \dots\dots\dots$$

$$y = \dots\dots\dots [2]$$

10 Without using a calculator, work out  $\frac{5}{6} \div 1\frac{1}{3}$ .

You must show all your working and give your answer as a fraction in its simplest form.

$$\dots\dots\dots [3]$$

11 Simplify.

$$2x^2 \times 5x^5$$

$$\dots\dots\dots [2]$$

- 12** Alex and Chris share sweets in the ratio Alex : Chris = 7 : 3.  
Alex receives 20 more sweets than Chris.

Work out the number of sweets Chris receives.

..... [2]

- 13** The length of one side of a rectangle is 12 cm.  
The length of the diagonal of the rectangle is 13 cm.

Calculate the area of the rectangle.

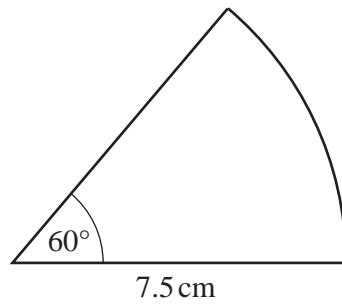
..... cm<sup>2</sup> [3]

- 14** Work out  $(3 \times 10^{199}) + (2 \times 10^{201})$ .  
Give your answer in standard form.

..... [2]

6

15

NOT TO  
SCALE

Calculate the area of this sector of a circle.

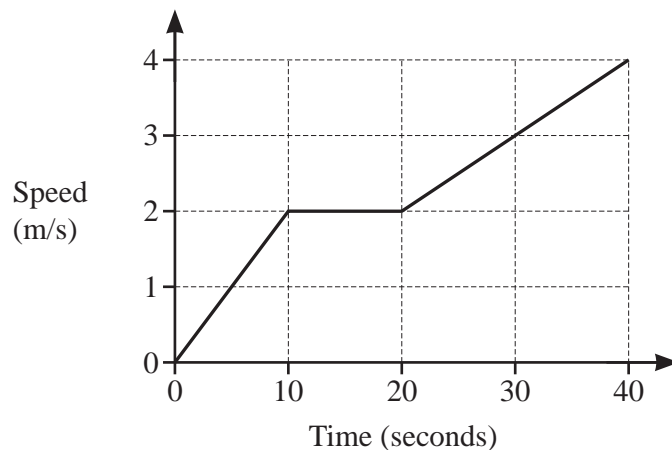
.....  $\text{cm}^2$  [2]

- 16** The selling price of a shirt is \$26.50 .  
This includes a tax of 6%.

Calculate the price of the shirt before the tax was added.

\$ ..... [2]

17



The diagram shows the speed–time graph for the first 40 seconds of a cycle ride.

(a) Find the acceleration between 20 and 40 seconds.

..... m/s<sup>2</sup> [1]

(b) Find the total distance travelled.

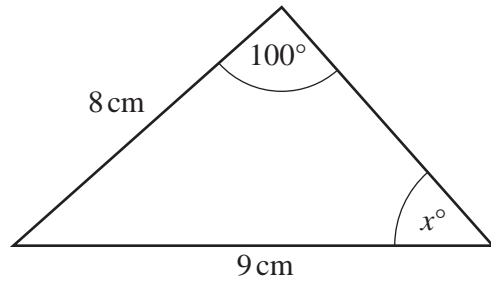
..... m [3]

18 The sides of an isosceles triangle are measured correct to the nearest millimetre. One side has a length of 8.2 cm and another has a length of 9.4 cm.

Find the largest possible value of the perimeter of this triangle.

..... cm [3]

19



NOT TO SCALE

(a) Calculate the value of  $x$ .

$x = \dots\dots\dots$  [3]

(b) Calculate the area of the triangle.

$\dots\dots\dots\text{ cm}^2$  [3]

20 A model of a statue has a height of  $4\text{ cm}$ .  
 The volume of the model is  $12\text{ cm}^3$ .  
 The volume of the statue is  $40\,500\text{ cm}^3$ .

Calculate the height of the statue.

$\dots\dots\dots\text{ cm}$  [3]

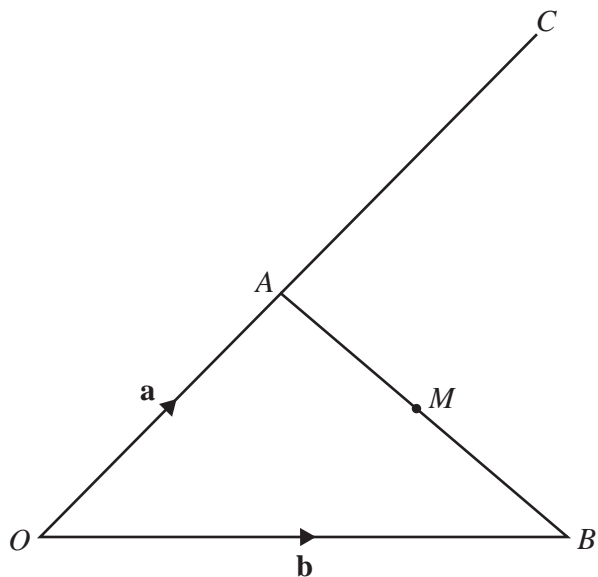


21 (a) Differentiate  $6 + 4x - x^2$ .

..... [2]

(b) Find the coordinates of the turning point of the graph of  $y = 6 + 4x - x^2$ .

(..... , ..... ) [2]



NOT TO SCALE

The diagram shows a triangle  $OAB$  and a straight line  $OAC$ .  
 $OA : OC = 2 : 5$  and  $M$  is the midpoint of  $AB$ .  
 $\vec{OA} = \mathbf{a}$  and  $\vec{OB} = \mathbf{b}$ .

Find, in terms of  $\mathbf{a}$  and  $\mathbf{b}$ , in its simplest form

(a)  $\vec{AB}$ ,

$$\vec{AB} = \dots\dots\dots [1]$$

(b)  $\vec{MC}$ .

$$\vec{MC} = \dots\dots\dots [3]$$

23 Write as a single fraction in its simplest form.

$$2 - \frac{2x-1}{x+1}$$

..... [3]

24 A line from the point (2, 3) is perpendicular to the line  $y = \frac{1}{3}x + 1$ .  
The two lines meet at the point  $P$ .

Find the coordinates of  $P$ .

( ..... , ..... ) [5]

**Questions 25 and 26 are printed on the next page.**

25 Solve the equation  $\tan x = 2$  for  $0^\circ \leq x \leq 360^\circ$ .

$x = \dots\dots\dots$  or  $x = \dots\dots\dots$  [2]

26 Simplify.

$$\frac{ux - 2u - x + 2}{u^2 - 1}$$

$\dots\dots\dots$  [4]

---

Permission to reproduce items where third-party owned material protected by copyright is included has been sought and cleared where possible. Every reasonable effort has been made by the publisher (UCLES) to trace copyright holders, but if any items requiring clearance have unwittingly been included, the publisher will be pleased to make amends at the earliest possible opportunity.

To avoid the issue of disclosure of answer-related information to candidates, all copyright acknowledgements are reproduced online in the Cambridge Assessment International Education Copyright Acknowledgements Booklet. This is produced for each series of examinations and is freely available to download at [www.cambridgeinternational.org](http://www.cambridgeinternational.org) after the live examination series.

Cambridge Assessment International Education is part of the Cambridge Assessment Group. Cambridge Assessment is the brand name of the University of Cambridge Local Examinations Syndicate (UCLES), which itself is a department of the University of Cambridge.